



Express each number using tally marks.

1) 19

---

2) 25

---

3) 72

---

4) 76

---

5) 83

---

6) 51

---

7) 58

---

8) 34

---

9) 55

---

10) 77

---

11) 86


---

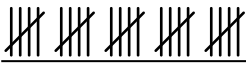
12) 54


---



Express each number using tally marks.

1) 19 

2) 25 

3) 72 

4) 76 


5) 83 

6) 51 

7) 58 

8) 34 

9) 55 

10) 77 

11) 86 

12) 54 